

LORD BUDDHA NATIONAL PUBLIC SCHOOL
Sarai bik , Jaunpur
Class - 1st

Sub-Math

Chapter-1

Numbers from 1 to 10

Date-8/4/20

1



One

2



Two

3



Three

4




Four

5



Five

6




Six

7




Seven

8



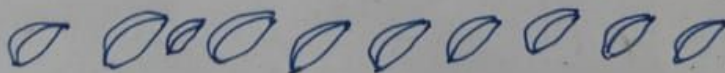
Eight

9



Nine

10





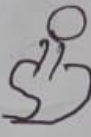


Ten






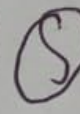

Write the numbers name 1 to 10

Chapter 2









Date-9/4/20

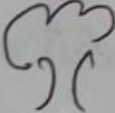




Count the figures and write the answers in the circles.

1.   +    = (5)

2.    +    = 

3.   +  = 

4.    +     = 

5.   +   = 

Write the numbers 1 to 25

Vertical Addition

Method

First step - Draw two vertical lines for 2 ||

Second step - Draw four more vertical lines for 4 ||||

Third step - Count total number of lines together.

There are 6 lines in all. So, two and four together make 6

or, $2 + 4 = 6$

Add the following by drawing lines.

①
$$\begin{array}{r} 3 \quad ||| \\ + 2 \quad || \\ \hline \end{array}$$

②
$$\begin{array}{r} 2 \quad || \\ + 5 \quad |||| \\ \hline \end{array}$$

③
$$\begin{array}{r} 4 \quad |||| \\ + 5 \quad |||| \\ \hline \end{array}$$

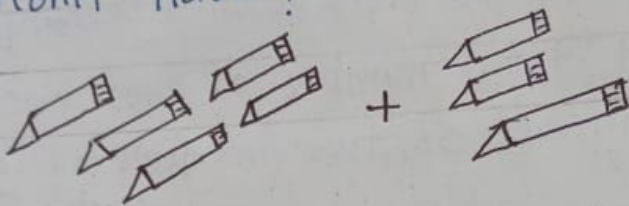
④
$$\begin{array}{r} 5 \quad ||||| \\ + 3 \quad ||| \\ \hline \end{array}$$

⑤
$$\begin{array}{r} 6 \quad ||||| \\ + 2 \quad || \\ \hline \end{array}$$

Chapter-4 Word Problems on Addition Date-12/4/20


Read and solve.

① Mohit bought five pencils and Rohit gave him three more pencils. Now how many pencils does Mohit have?



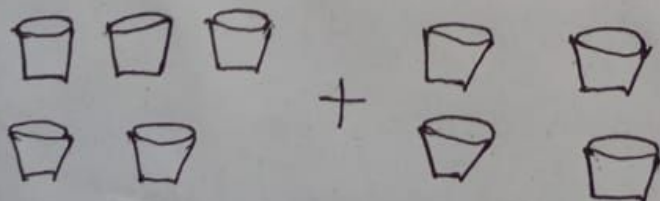
$$5 + 3 = 8$$

② There are seven balls in one box and two balls in another box. How many balls are there altogether?



$$7 + 2 = 9$$

③ There are five glasses on the table. Pragya put four more glasses on the same table. Now, how many glasses are there on the table?



$$5 + 4 = 9$$

Read and understand.



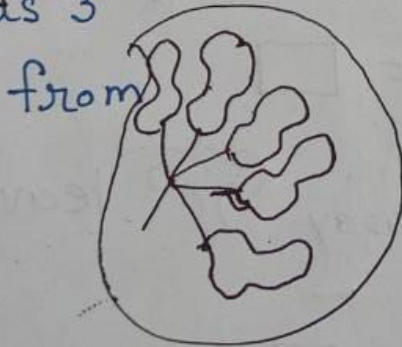
Tinu has five balloons.



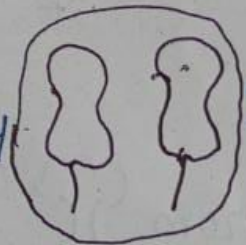
He gives two balloons to Minu.

How many balloons are left with Tinu

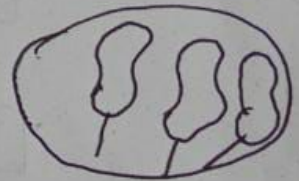
Answer is 3



take away



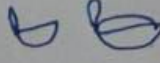

leaves



In maths, we write it as $5 - 2 = 3$




Now we know! - Subtraction means "to take away".
" - " is the symbol of subtraction.

Say and write -




(i) From  take away  leaves

Chapter-




Think, Count and Subtract Date - 14/4/20

(1) From  take away  leaves 

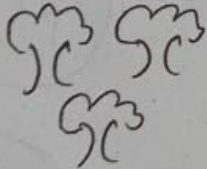


$$\boxed{5} - \boxed{2} = \boxed{}$$

(2) From  take away  leaves 

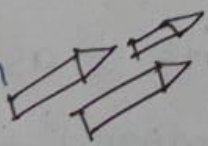
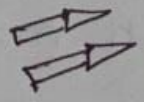

$$\boxed{6} - \boxed{4} = \boxed{}$$

(3) From  take away  leaves 

$$\boxed{8} - \boxed{3} = \boxed{}$$

(4) From  take away  leaves 

$$\boxed{3} - \boxed{1} = \boxed{}$$

(5) From  take away  leaves 

$$\boxed{3} - \boxed{2} = \boxed{}$$