

Write the backward counting 50 to 1.

50

40

30

20

10

41

31

21

11

1

Loyd Buddha National Public School

Class - U.K.G
Subject - Maths

Date 14/04/2020
Page 08

Write and learn table of 2.

Remark: _____

Match the numbers to number names.

8

Twenty

10

Fifteen

12

Seventeen

20

Nineteen

15

Fourteen

17

Eight

19

Ten

14

Twelve

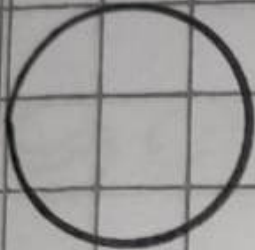
Remark: _____

Teacher's Signature _____



Write the backward counting 100 to 1

Remark: _____

Write the shapes name and learn it.




-



-




-



-



-



Remark: _____

Teacher's Signature _____

Write and learn table of 3.

Remark: _____

Teacher's Signature _____